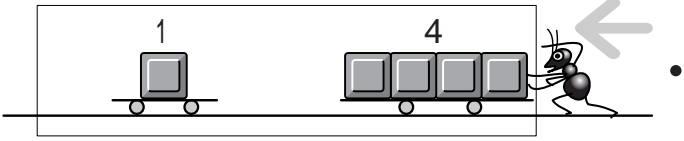


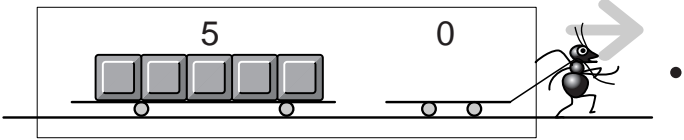
チョコレートは いくつになるのだろう?



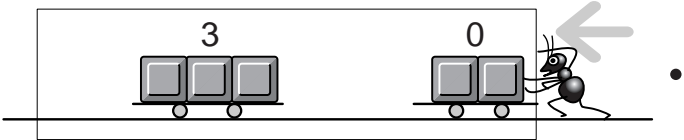
せんで むすぼう。



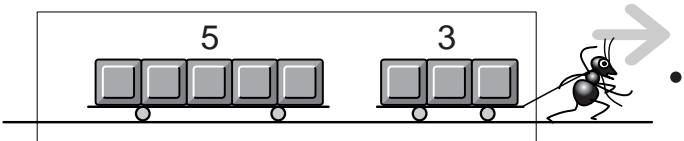
• $3 + 2 = 5$



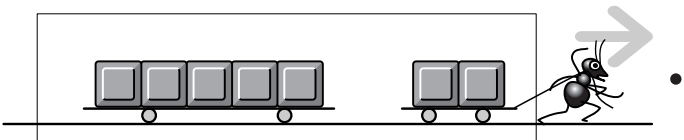
• $8 - 3 = 5$



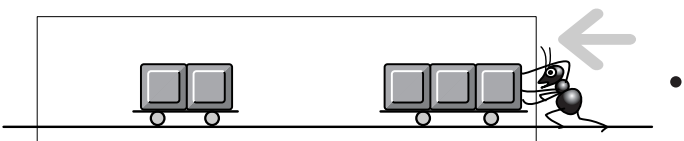
• $1 + 4 = 5$



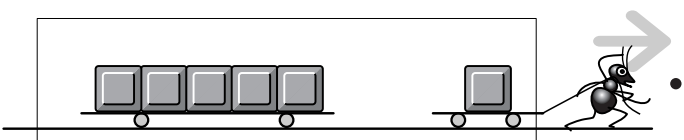
• $7 - 2 = 5$



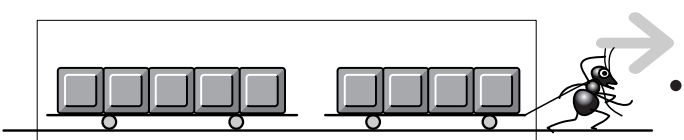
• $5 - 0 = 5$



• $10 - 5 = 5$



• $2 + 3 = 5$



• $6 - 1 = 5$